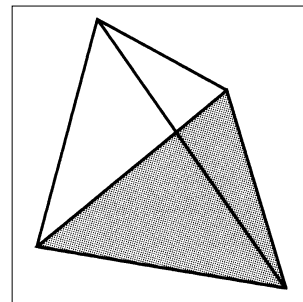
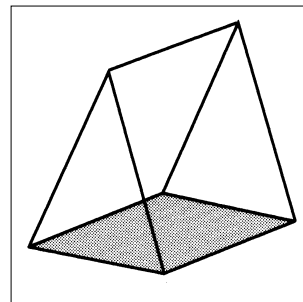
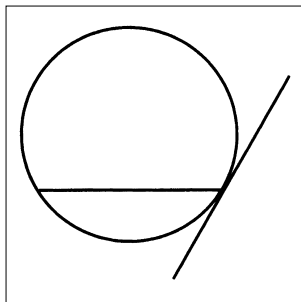
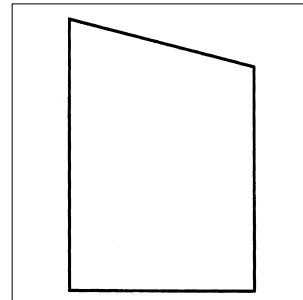
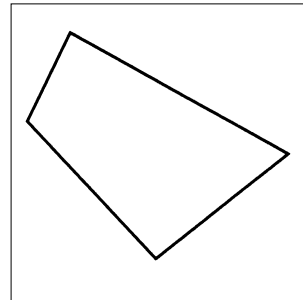
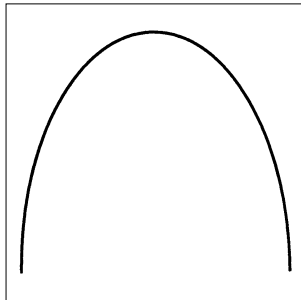
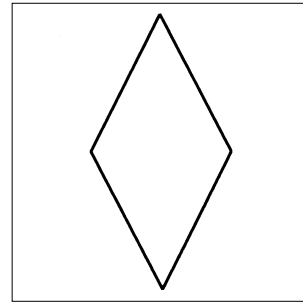
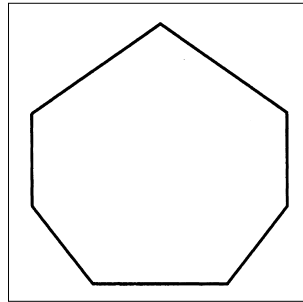
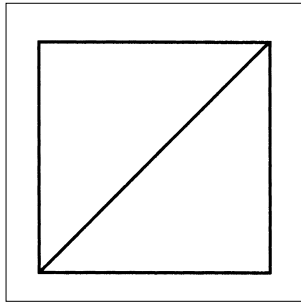


All Shapes and Sizes

1 Label these shapes, or parts of shapes, with the following words:

rhombus prism heptagon trapezium chord tetrahedron
tangent parabola circumference apex trapezoid



2 Which is larger, a **hectare** or an **acre**?

3 How many kilogrammes are there in a **tonne**?

4 What is a **gallon** in litres?

5 Horse races are often measured in **furlongs**.
 How long is an eight-**furlong** race?

6 Sailors measure the depth of water in **fathoms**.
 What is twelve feet in **fathoms**?